

St. P B N Public School

EXAMINATION

U.T- IV

SAMPLE PAPER

COMPUTER

Class –II

Time:

MM:20

Q1. Tick the correct answer.

(0.5×5=2.5)

1. To open paint, click on Start>_____>Accessories.

- a) MS office b) All office c) All programs

2. The _____ tool works similar to the line tool.

- a) Rectangle b) Polygon c) oval

3. The _____ tool contains airbrush option.

- a) Shapes b) Brush c) Paint

4. _____ button contains save option.

- a) Home b) File c) Paint

5. We can select the save option by clicking on the _____ button.

- a) Paint b) File c) Home

Q2. Fill in the blanks:

(0.5×5=2.5)

(title, quit, two, tools, Brush)

1. The _____ bar displays the program name and file name.
2. _____ tool is used to quit tux paint.
3. The curve can be modified only _____ times.
4. The _____ button is used to select the spray size of an airbrush.
5. Fill with color tool is present in the _____ group.

Q3. State true or false: (1×5=5)

1. The office button in paint contains the open option. ()
2. The airbrush tool is used to spray color. ()
3. The curve tool is found in the colors group. ()
4. Select new tool in tux paint to open new slide. ()
5. The picture will appear on the drawing canvas. ()

Q4. Answer the following: (1×5=5)

1. From which group we can select a color?

2. Which tool is used to draw a polygon?

3. Which option do you select to open the drawing that you had saved?

4. Name the tool that is used to start a new drawing?

5. Which tool in tux paint is similar to the brush tool of MS Paint?


Q5. Identify the following:

(1×5=5)

1.



2.



3.



4.



5.



St. PBN Public School, Gurugram

UNIT Test – IV

Sample paper

CLASS – II

ENGLISH

TIME: 2 hours

MM-40

GENERAL INSTRUCTIONS:

1. All questions are compulsory.
2. Read each question carefully.

NAME: _____

ROLL NO: _____

Section (A) [Comprehension]

Q1 Read the unseen passage.

(5 Marks)

Mark is at the park.

His dog Max, is with him.

Mark flies his kite and plays with Max.

They run and jump in the sun.

Then Mark goes to the pond to see the ducks.

He thinks they are so cute and funny.

Max also wag his tail in happiness.

- a) Where is Mark and his dog?

i) Park ii) school iii) home

b) What is Mark's dog name?

i) Ash ii) Max iii) Tom

c) What Mark and his dog were doing in the park?

i) Played together ii) sleeping iii) fighting

d) Why does Mark goes to the park?

i) to see ducks ii) to drink water iii) to sleep there.

e) Why Max wagged his tail?

i) in happiness ii) in sadness iii) none of them

Section – (B)

Q2.) Answer the following questions.

(1x5=5)

a) Why did lightning the Ram burn things?

b) What did lightning do when he went to the sky?

c) Were Smita's directions clear? How do you know?

d) Why Smita feel hurt?

e) What do you mean by landmark?

Q3.) Fill in the blanks.

(0.5x6=3)

Shyamlal uncle	three	Ewe	Ram	Trichy
GPS				

a) The people complained to the king _____ times.

- b) _____ is the name of mother sheep.
- c) _____ is the name of son sheep.
- d) _____ is the place where Smita lives in India.
- e) We take directions from the phone with the help of

- f) _____ was coming to Smita's house.

Q4) Write the meaning of the following words.

(1x3=3)

a) Ordered

—

b) Flash

—

c) Cab

—

Q5) Make sentences from the following words.

(1x3=3)

a) Long

b) Angry

c) House

Section – C (Grammar)

Q6) Circle the correct preposition in the following sentences.

(0.5x4=2)

- a) A book is kept on the table.
- b) There is an apple in the basket.
- c) A boy is standing under the tree.
- d) The boy sat between his parents.

Q7) Circle the words which tell us more about the action words (adverbs).

(0.5x4=2)

- a) They play music loudly.
- b) She is walking slowly.

c) The moon shines brightly.

d) The children play happily.

Q8) Fill in the blanks with correct preposition.

(0.5x6=3)

a) The slippers are _____ (under / in) the bed.

b) The bed is _____ (on / near) the shelf.

c) The girl is _____ (behind / between) the bus.

d) She stood _____ (on / in front of) mirror.

e) Sia was _____ (at / over) the party last evening.

f) The dog is _____ (on / between) the bed.

Q9) Choose words from the box to complete the sentences.

(0.5x6=3)

Quickly	slowly	loudly	quietly	shyly
brightly				

a) The old man walked _____

b) In the library , we talked _____

c) He smiled _____

d) Ben sings _____

e) The stars shine _____ in the sky.

f) We went _____ to the store.

Q10) fill in the blanks with correct conjunction to complete the sentences.

(0.5x8=4)

a) Sonu _____ (and / or) Monu are my friends.

b) Do you want a pen _____ (or / but) a sketch pen.

c) I am tall _____ (but / or) my sister is short.

d) I want cake, _____ (but / in) I am not allowed.

e) I bought candles, cakes _____ (and / or) ice creams for party.

f) You must study, _____ (or/and) you will fail.

g) Jack _____ (and / but) Jill went up the hill.

h) I know the secret , _____ I can't tell you.

Q11) Underline the conjunctions in the following sentences.

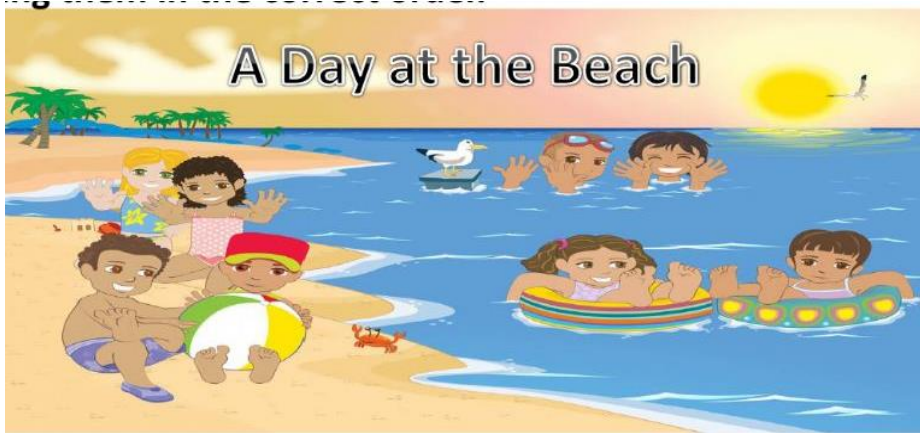
(1x2=2)

a) Rahul is painting and Sia is reading.

b) Do you want to sit in the chair or on the sofa?

Q12) Look at the picture carefully and complete the sentences using the words from the help box.

(5 marks)



beach	shining	sand	playing
swimming			

- a) This is a scene of a _____
- b) Some children are _____ in the sea.
- c) Two boys are _____ with ball.
- d) Two girls are playing with _____
- e) The Sun is _____ brightly in the sky.



St. PBN PUBLIC SCHOOL, GURUGRAM

UT-4 EXAMINATION

Class -II

Subject- EVS

Sample Paper

MM-40

Time: 2 hours

General Instructions

1. All questions are compulsory.
2. Read each question carefully.

NAME: _____

CLASS: _____

ROLL NO. _____

DATE: _____

Q1. Fill in the following blanks:

(1x5=5)

1. The low land between two hills is called _____.
2. A means of transport that travels on oceans and seas _____.
3. A means of transport pulled by animal's _____.
4. Hot and dry sandy land _____
5. We should cross a road at _____ crossing.

6. Q2. Tick (✓) the correct answer:

(1x10=10)

1. A very big hill is called _____
a) Lakes b) Mountains
2. What do we call a land which is surrounded by water from all the sides?
a) Island b) Flatland
3. When did the first train start in India?
a) 16 April 1853 b) 20 April 1853
4. The tip of a mountain is called a _____.
a) Valley b) peak
5. Air that moves very strongly is called _____.
a) Breeze b) Storm
6. We need _____ to breathe.
a) Air b) clothes
7. We travel on rivers and lakes by _____.
a) Steamers b) car
8. _____ is a cleaner fuel.
a) Petrol b) CNG

9. _____ is a computer network that connects all the computers of the world.

a) Internet

b) Smoke signals

10. A _____ is one of the oldest means of communication.

a) Video calls

b) Letters

Q3. Write True or False:

(1x5=5)

1. Rainfall is a natural source of freshwater _____
2. We must not recycle the things that we have already used. _____
3. Lakes can be Natural or Man-made. _____
4. Newspapers tell us the important events around the world . _____
5. Earlier people use to tamed animals to carry their loads _____

Q4. Answer the following questions

(2x5=10)

1. What is a factory?

Ans.

2. Name two fuels that used in modern vehicles.

Ans.

3. Why earth is known as blue planet? Explain.

Ans

4. Which vehicles do we use to travel on rivers and lakes?

Ans. _____

5. What is outer space?

Ans.

Q5. Match the following:-

(1x5=5)

1. Letters

Pollute environment

2. Air transport

old things

3. Factories

four wheels

4. Recycle

Rocket

5. Car

Post office

Q6. Name the following :

(1x5=5)

1. Quickest means of transport _____

2. When did the first train start in India _____

3. Flat and high land on earth are called _____

4. A great body of salty water _____

5. A naturally flowing water body _____

आदर्श प्रश्न-पत्र

कक्षा : दूसरी

विषय : हिंदी

• साहित्य

1. निम्नलिखित गद्यांश को पढ़कर प्रश्नों के उत्तर दीजिए । (1x5=5)

चम्बा नगर में कमल नाम का एक बुद्धिमान व्यक्ति रहता था। एक बार उस नगर में एक बंदर आ गया। बंदर बहुत ही शरारती था। वह लोगों को बहुत तंग करता था। वह लोगों के कपड़े, बर्तन, खाना आदि लेकर भाग जाता था। सभी लोग उस बंदर से परेशान हो गए थे परन्तु मोहन को वह बहुत पसंद था। मोहन को विश्वास था कि बंदर से मित्रता करके उसमें परिवर्तन लाया जा सकता था।

i) बुद्धिमान व्यक्ति का क्या नाम था?

क) मोहन () ख) कमल ()

ii) बंदर स्वभाव से _____ था।

क) शरारती () ख) हँसमुख ()

iii) बंदर लोगों को बहुत _____ करता था।

क) हँसाया () ख) परेशान ()

iv) मोहन को कौन पसंद था?

क) कमल ()

ख) बंदर ()

v) मोहन को विश्वास था कि बंदर से _____ करके उसमें परिवर्तन लाया जा सकता है।

क) मित्रता ()

ख) शत्रुता ()

2. सही वाक्यों पर सही तथा गलत वाक्य पर गलत का निशान लगाइए : (0.5x4=2)

i) होलिका हिरण्यकश्यप की बहन थी। ()

ii) सोनू खेलने गया था। ()

iii) सलोनी दीदी किसी अस्पताल में काम नहीं करती थी। ()

कपड़े

ऊँचा

विष्णु

गर्मी

टोपी

3. दिए गए शब्दों की सहायता से रिक्त स्थान भरिए - (0.5x5=2.5)

i) _____ ठिठुरन से रक्षा करती है।

ii) प्रह्लाद भगवान _____ की पूजा करता था।

iii) बच्चों की _____ की छुट्टियाँ हो गई थीं।

iv) माँ ने सोनू के लिए _____ बदलवाए।

v)टोपी वाले नेता का कद _____ माना जाता है।

4. निम्नलिखित शब्दों के अर्थ लिखिए - (0.5x5=2.5)

i)दहन - _____ ii)आन-बान -

_____ iii)तरकीब - _____

iv)जीवन-मूल्य - _____ v)स्वच्छ -

5. निम्नलिखित प्रश्नों के उत्तर एक वाक्य में लिखिए -
(0.5x4=2)

i)बच्चों ने लोमड़ी को कुएँ में क्या दिखाया ?

ii)गंजे लोगों के लिए टोपी का क्या महत्त्व है ?

iii)माँ ने सोनू को क्या याद दिलाया ?

iv) बच्चों को उदास होता देख दीदी ने उनसे कौन-सा प्रश्न पूछा ?

6. निम्नलिखित प्रश्नों के उत्तर लिखिए - (2 x 3 = 6 अंक)

i) बच्चों ने अपने माता - पिता को पानी बचने के लिए कौन-कौन से सुझाव दिए?

ii) लोमड़ी कुएँ में कैसे पहुँची ?

iii) झंडे को सलामी देते समय हम किस बात का प्रण लेते हैं ?

व्याकरण

1.समान अर्थ वाले एक - एक शब्द लिखिए : (1x4=4)

i)पुत्री - _____ ii)घर- _____

iii)दिन - _____ iv)हवा - _____

2.साल के बारह महीनों के नाम लिखिए : (0.5x12=6)

i) _____ ii) _____

iii) _____ iv) _____

v) _____ vi) _____

vii) _____ viii) _____

ix) _____ x) _____

xi) _____ xii) _____

3. निम्नलिखित शब्दों को पढ़ें और पर्यायवाची शब्दों पर गोला लगाएँ :(1x5=5)

i) बाग़ - उपवन नयन ग्रंथ

ii) चन्द्रमा - सुता राकेश बेटा

iii) वृक्ष - विटप पोथी पुस्तिका

iv) पर्वत - अचल पृथ्वी वाटिका


v) बादल - विहग मेघ जलद

4. निम्नलिखित शब्दों की सहायता से कहानी को पूरा करें : (1x5=5)

एक समय की बात है, एक गांव में ढेर सारे मुर्गे रहते थे। गांव के _____ ने किसी _____ ने एक मुर्गे को तंग कर दिया था। मुर्गा परेशान हो गया, उसने सोचा अगले दिन सुबह मैं _____ नहीं करूंगा। सब सोते रहेंगे तब मेरी अहमियत सबको _____ में आएगी, और मुझे तंग नहीं करेंगे। मुर्गा अगली सुबह कुछ नहीं बोला।

जमीन लोग जगह पर रुक कर आते आते _____ में
चलता चलता आवाज़ काम बच्चे _____ की

के बिना कोई काम नहीं रुकता। सबका काम _____ रहता है।



St. PBN PUBLIC SCHOOL, GURUGRAM
Sample Paper
Class – II
Subject- MATHEMATICS

MM-50

Time: 2 Hrs

General Instructions

1. All questions are compulsory.
2. Read each question carefully.
3. Allotted marks are indicated against each question.

M.M-50

1. Tick the correct answer.

1x10=10

(i) 2 rupee= _____paise.

(a) 200

(b) 2000

(ii) The symbol for Indian rupee is _____.

(a)\$

(b) ₹

(iii) 65 rupees = 20 rupees+ _____ rupees.

(a)35

(b) 45

(iv) The day after today is _____.

(a)Tommorrow

(b) Yesterday

(v) I have breakfast at 9 _____.

(a)a.m.

(b) p.m.

(vi) The month before June_____.

(a)April

(b) May

(vii) 3,6,9,12,15_____.

(a)18

(b) 21

(viii) 1,12,123,_____.

(a)1234

(b) 01234

(ix) ABC,BCD,CDE,_____.

(a)DEF

(b)ABC

(x) AC,AD,_____,AF.

(a) AE

(b) AC

2.Solve the following as instructed .

2x10=20

(i) Solve the following.

(a) ₹ p

725 28

- 515 20

(b) ₹ p

219 25

- 105 10

(ii) Write in figures:

(a) Thirty seven rupees. _____

(b) Two hundred sixty three rupees. _____.

(iii) Write in words:

(a) ₹800 = _____.

(b) ₹586 = _____.

(iv) Draw the hands of the clocks to show the given time.

(a) 3:00



(b) 8:00



(v) Use the clock to fill in the blanks.

(4)

The time is _____.



In 30 minutes the time will be _____.

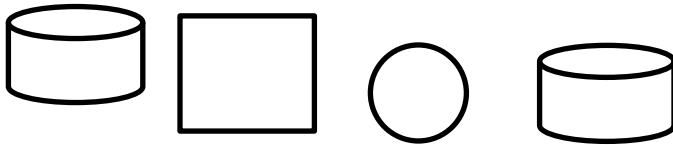
One hour ago the time was _____.

In one quarter hour the time will be _____.

(vi) Complete the pattern:

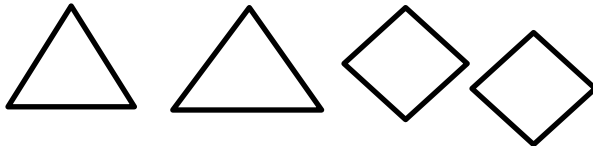
(a) AB1, AC1, AD1, _____, _____.

(b)



_____, _____

(c)



_____, _____

(d) BC, DE, FG, _____, _____.

(vii) What time is it? Use a.m. or p.m.

(a) 9 o'clock in the evening _____.

(b) Half past 8 in the morning _____.

3. Match the following.

1x4=4

- (i) 15 rupees 3:30
- (ii) Half past 3 3.25
- (iii) 3 rupees+ 25p ₹5+₹5+₹5
- (iv) Quarter past 2 2:15

4. Word problems . 2x3=6

(i) Meenakshi bought 1 pencil box, 2 erasers and 1 pen .Find amount spent by her.

1 pencil box	₹50
2 erasers	₹12
1 pen	₹15
Total	₹ _____

(ii) Yesterday Janika started reading a book at 9:00 p.m. She read for 30 minutes .At what time did she finish?

(iii) Simmy ordered a burger at 8:30 p.m. and it was delivered 40 minutes later . At what time did the burger arrive?

5. Dodging of tables.

1x5=5

(i) $5 \times 9 =$ _____.

(ii) $8 \times 8 =$ _____.

(iii) $6 \times 5 =$ _____.

(iv) $4 \times 9 =$ _____.

(v) $5 \times 5 =$ _____.

6. Fill in the blanks.

1x5=5

(i) The first month of the year is _____.

(ii) The month before July _____.

(iii) 7, 14, 21, _____, _____.

(iv) _____ 2 rupees coin makes ₹20.

(v) The amount _____ is also written as 56 rupees 25 paise.