

ST. PBN PUBLIC SCHOOL
UNIT TEST-IV
CLASS – I
ENGLISH
SAMPLE PAPER

TIME: 2 Hours

MM-40

GENERAL INSTRUCTIONS:

- 1. All questions are compulsory.**
- 2. Read each question carefully.**

NAME: _____ **ROLL NO:** _____

Section-A (Reader)

Q1) Answer the following questions.

(1x4=4)

a) What are the things the poet cannot do?

The poet cannot _____

b) Why poet cannot run a mile?

c) What is the poet asking?

d) What were the other animals afraid of?

Q2) Fill in the blanks with the words given in the box.

(1x4=4)

feet	heavy	smile	friend
------	-------	-------	--------

- a) Armadillo danced with _____ skin.
- b) The poet can _____.
- c) The poet is asking to be his _____.
- d) The poet got hurt in his _____.

Q3) Write Yes or No.

(1x6=6)

- a) The poet can run a mile. _____
- b) The young boy played violin. _____
- c) No other animals joined the group. _____
- d) A tapir has three toed feet. _____
- e) Monkeys did not make any noise. _____
- f) The boy did not miss his father. _____

Section-B (Grammar)

Q4) Fill in the blanks with is, am, are, has have.

(1x6=6)

- a) She _____ a guava.
- b) I _____ eating his food.
- c) They _____ playing.
- d) We _____ bought an umbrella.

e) The dress _____ pink.


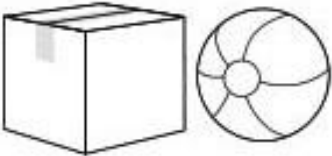
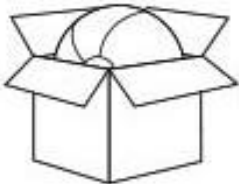
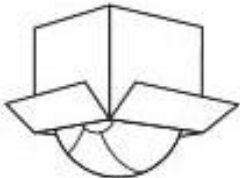
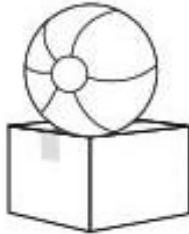
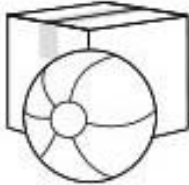
f) The boys _____ caps.

Q5) Where is the ball? Circle the correct position word.

(6)

Where Is the Ball?

In each section, circle the word that describes the ball's position in relation to the box.

			
in front of	behind	inside	next to
			
inside	next to	on top of	under
			
on top of	under	in front of	behind

Q6) Underline the joining words.

(1x4=4)

a) An egg is small and white.

b) She wants to dance but she is hurt.

c) The dog barks and wags his tail.

d) This balloon is big and round.

Q7) Circle the describing words.

(1x5=5)

- a) I want a red pen.
- b) This is a round ball.
- c) She is a pretty girl.
- d) I have two pens.
- e) There is a long rope.

Q8) Write 5 lines on “My Favourite Festival”.

(1x5=5)

1. _____
2. _____
3. _____
4. _____
5. _____

सेंट पी बी एन पब्लिक स्कूल
SAMPLE PAPER
इकाई परीक्षा IV
कक्षा : पहली
विषय : हिंदी

समय 2 घंटे

अंक 40

NAME: _____ ROLL NO _____

सामान्य निर्देश :

- 1 सभी प्रश्नों के उत्तर देना अनिवार्य है।
- 2 लेख और वर्तनी का ध्यान रखें।
- 3 प्रश्नों को ध्यान से पढ़कर उत्तर दीजिए।

प्रश्न 1. सही विकल्प चुनें :

(1x5=5)

क) परीलोक में कौन घूमना चाहता था?

i) चंदा

ii) परी

ख) किसने कहा "मेरी आँखें बहुत सुन्दर हैं"?

i) खरगोश ने कहा

ii) कछुए ने कहा

ग) किसने कहा "हमारी धरती ऐसी क्यों नहीं है"?

i) परी ने

ii) चंदा ने

घ) झाड़ियों के पीछे चंदा को क्या दिखाई दिया।

i) जानवर

ii) जादुई छड़ी

ङ) किसने कहा "तुम स्वयं पर इतना घमंड मत करो"?

i) पशु-पक्षियों ने

ii) कछुए ने

प्रश्न 2. सही वाक्य पर सही तथा गलत वाक्य पर गलत का निशान लगाएं :

(1x4=4)

i) कछुआ सभी पशुओं से तेज़ भाग सकता है।

()

ii) खरगोश के लिए तालाब को पार करना आसान कार्य था।

()

iii) कछुए की आवाज़ से खरगोश की नींद टूट गई। ()

iv) पशु-पक्षी खरगोश को बधाई देने लगे। ()

प्रश्न 3. सही विकल्प चुनकर रिक्त स्थान भरें :

(1x5=5)

परी खरगोश सुबह खुश कछुआ

(i) _____ धीमी गति से चल रहा था।

(ii) किसी जंगल में एक _____ रहता था।

(iii) परी अपनी छड़ी पाकर _____ हुई।

(iv) चंदा _____ के साथ परीलोक उड़ चली।

(v) घूमते - घूमते _____ हो गई।

प्रश्न 4. निम्नलिखित शब्दों के अर्थ लिखिए :

(1x4=4)

i) अधखुली - _____

ii) कठिन - _____

iii) सुनहरी - _____

iv) छोर - _____

प्रश्न 5. निम्नलिखित प्रश्नों के उत्तर लिखें :

(2x3=6)

(i) कछुए का मज़ाक उड़ाते हुए खरगोश ने क्या कहा ?

(ii) चंदा को परीलोक कैसा लगा ?

(iii) खरगोश अपनी परछाई देखकर क्या कहने लगा ?

प्रश्न 6. अनेक शब्दों के लिए एक शब्द लिखें :

(1x6=6)

(i) साथ पढ़ने वाला _____

(ii) लिखने वाला _____

(iii) जो पढ़ा लिखा न हो _____

(iv) जो कभी न मरे _____

(v) जो सच बोलता हो _____

(vi) खेती करने वाला _____

प्रश्न 7. निम्नलिखित शब्दों के विपरीत शब्द लिखिए :

(1x5=5)

(i) गरम - _____

(ii) छोटा - _____

(iii) दुख - _____

(iv) सरल - _____

(v) नीचे - _____

प्रश्न 8. निम्नलिखित शब्दों के लिंग बदलकर लिखिए :

(1x5=5)

(i) राजा- _____

(ii) लड़का- _____

(iii) बैल- _____

(iv) दादा- _____

(v) बकरा- _____

ST. PBN PUBLIC SCHOOL
UNIT TEST – IV
CLASS – I
MATHEMATICS

TIME: 2 Hours

MM-50

GENERAL INSTRUCTIONS:

- 3. All questions are compulsory.**
- 4. Read each question carefully.**

NAME: _____ **ROLL NO:** _____

1. Tick the correct answer (1x15=15)

(i) Tick the correct amount ₹5 + ₹5 + ₹5.

- (a) ₹15 (b) ₹5

(ii) Which amount shown below is more than ₹50.

- (a) ₹20 (b) ₹80

(iii) ₹50 amount can be written in words as:

- (a) fifty (b) fifteen

(iv) How many ₹2 Coins make ₹10?

- (a) 2 (b) 5

(v) Money is counted in terms of notes and _____.

- (a) rupees (b) coins

(vi) Which of the following note does not exist?

- (a) 10 (b) 15

(vii) How many days are there in a week?

- (a) 5 (b) 7

(viii) Which day comes just after two days from Sunday?

(a) Monday

(b) Wednesday

(ix) A clock shows the time 07:00. At this time, the minute hand will be at which number?

(a) 6

(b) 12

(x) Which of the following activity can be done in one minute?

(a) playing cricket

(b) sharpening a pencil

(xi) Which of the following month has only 28 days or 29 days in a year?

(a) January

(b) February

(xii) If yesterday was Thursday, then today is.

(a) Saturday

(b) Friday

(xiii) A1, B1, C1, _____

(a) D1

(b) E1

(xiv) Observe and complete the pattern:


10, 20, 30, _____

(a) 50

(b) 40

(xv)     _____

(a) 

(b) 

2. Solve the following:

(2×5=10)

(i) Write the missing months:

(a) June, _____, _____, September.

(b) October, _____, December, _____.

(ii) Write the days:

(a) 2 Days after Monday _____.

(b) 2 Days before Friday _____.

(iii) It is time for Mihir's dance class.

What time is it?



_____ O'clock

(iv) How many notes of twenties make 60 rupees?

(v) Draw next two shapes of the pattern:

(a)     _____, _____

(b)     _____, _____

3. Write the number names of the following:

(1×5=5)

(i) 159 = _____

(ii) 186 = _____

(iii) 163 = _____

(iv) $188 =$ _____

(v) $199 =$ _____

4. Solve the following.

(2×3=6)

(i) Renu buys sketch pens for ₹ 47 and packet of pencils for ₹ 20. How much money does she spend?

(ii) Anamika has five 10 rupee notes. How much money does she have altogether?

(iii) It was time for school. When John looked at the clock, the minute hand was on 6 and the hour hand was on 8. What time was it?

5. Dodging of tables:

(1×4=4)

(i) $6 \times 8 =$ _____

(ii) $7 \times 7 =$ _____

(iii) $5 \times 9 =$ _____

(iv) $3 \times 6 =$ _____

6. State True or False.

(1x5=5)

(i) Thursday is the fourth day of week. _____

(ii) The eleventh month of the year is September _____

(iii) The short hand of the clock is called as hour hand. _____

(iv) March comes between April and June. _____

(v) ₹ 10 + ₹ 50 + ₹ 10 = ₹ 80 _____

7. Case Study :

(5)

A calendar has all the twelve months of a year .It shows all the dates for each month. It also shows which date falls on which day of the week.

Name the following:

1. The first month of the year _____

2. The month before April _____

3. The eighth month of the year _____

4. The last month of the year _____

ST. PBN PUBLIC SCHOOL, GURUGRAM
UNIT TEST-IV
SAMPLE TEST PAPER
CLASS – I
EVS

TIME: 2 Hours

MM-40

GENERAL INSTRUCTIONS:

- 1. All questions are compulsory.**
- 2. Read each question carefully.**

NAME: _____

ROLL NO: _____

1. Tick the correct answer

(1x10=10)

(i) Horse carriages are also called _____.

(a) bullock cart.

(b) Tonga

(ii) We travel on water by a _____.

(a) car

(b) boat

(iii) If we are not careful, we may get _____.

(a) chips

(b) hurt

(iv) The earth is _____ in shape.

(a) Round

(b) rectangular

(v) _____ twinkles in the sky.

(a) Earth

(b) Star

(vi) How many main seasons are there in our country?

(a) 3

(b) 5

(vii) We use _____ in rainy seasons.

(a) raincoat

(b) sweater

(viii) We can see moon at _____.

(a) morning

(b) night

(ix) The moon is _____ in shape.

(a) round

(b) triangle

(x) We feel hot in _____ season.

(a) summer

(b) winter

2. Write True or False:

(1×5=5)

(i) Weather changes very fast.

(ii) We like to drink cold milk in winter.

(iii) A desert is a place with lots of water.

(iv) Aeroplanes are the fastest means of transport.

(v) We should not cross the road at Zebra crossing.

3. Fill in the Blanks.

(1×5=5)

Roof	summer	plants	boats	Night
------	--------	--------	-------	-------

(i) Ships and _____ are means of water transport.

(ii) Rain helps _____ to grow.

(iii) _____ is the hottest time of the year.

(iv) We sleep for a long time at _____.

(v) The sky is the _____ of the earth.

4. Answer the following questions in brief.

(2×3=6)

(i) Write the names of any two main seasons in our country.

(ii) Name the different landforms on the earth?

(iii) What are deserts?

5. Match the following.

(1x5=5)

- | | |
|--------------------|----------------------|
| (i) Helicopter | Moves on four wheels |
| (ii) Plains | Winters |
| (iii) Warm clothes | Air transport |
| (iv) Monsoons | Flat lands |
| (v) Car | Rainy season |

6. Name the following –

(1x5=5)

- (i) Top most colour in a rainbow. _____
- (ii) Hot and dry place covered with sand. _____
- (iii) This season comes after summer. _____
- (iv) Black and white lines on road. _____
- (v) A means of transport that runs on tracks. _____

7. Case Study .

(1x4=4)

When we wake up in the morning, we may find it bright and sunny outside. Suddenly it may become cloudy and windy. In some hours, it might start raining.

Answer the following:

1. There are _____ main seasons in India.
2. _____ is the warmest time of the year.
3. _____ may be hot, cold, cloudy, windy etc.
4. Weather conditions of a place for a longer period of time is called _____.

ST. PBN PUBLIC SCHOOL
UNIT TEST - IV
CLASS-I
COMPUTER
SAMPLE PAPER

Time: 1Hour

MM: 20

General Instructions:

1. All questions are compulsory.
2. Read each question carefully.

NAME: _____ **ROLL NO:** _____

A. Tick the Correct Answer.

(0.5x5=2.5)

1. How many number keys are there on a keyboard?
a. 22 b. 26 c. 10
2. _____ key helps you to erase any letter.
a. Enter b. Backspace key c. Caps Lock
3. A keyboard has _____ Enter keys.
a. 1 b. 2 c. 4
4. A computer does not work on its _____.
a. Own b. User c. None of these
5. Which key is used to give space between letters?
a. Spacebar key b. Number key c. Caps lock

B. Fill in the blanks.

(0.5x5=2.5)

(Pen drive, Caps lock key, Spacebar key, time, Alphabet)

1. _____ Keys are used to type words and sentences.
2. The _____ is the longest key on keyboard.
3. _____ makes the letter appear in Capital.

4. A computer saves our _____.

5. _____ is a storage device.

C. Tick True (T) or False (F).

(0.5x10=5)

1. Number Keys are 22 on a keyboard.

a. True

b. False

2. Spacebar key can work like an eraser.

a. True

b. False

3. Enter key is a longest key.

a. True

b. False

4. Data cannot be pictures.

a. True

b. False

5. A computer can remember the data stored in it.

a. True

b. False

6. A Keyboard is used to make drawings.

a. True

b. False

7. CD is a storage device.

a. True

b. False

8. A computer stores mathematical data.

a. True

b. False

9. We can store data in Harddisk.

a. True

b. False

10. Keyboard is an input device.

a. True

b. False

D. Answer in one word or one sentence.

(1x6=6)

1. Where does a computer store its data?

2. Name any 2 special keys?

3. Which key moves the cursor to the next line?

4. What do we call the devices that store things?

5. Write full form of CD?

6. Which type of keys is used to type Name?

E. Case based Questions-

1. Identify these by given hints and write their name - (.5x2=1)

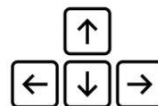
a. Round in shape used to store data _____

b. Internal storage of computer _____

2. Write the name of followings-

(1x3=3)

a. _____



b. _____



c. _____



