

**ST. PBN PUBLIC SCHOOL, GURUGRAM**  
**UNIT TEST-IV**  
**CLASS – II**  
**ENGLISH**  
**SAMPLE PAPER**

**TIME: 2 Hours**

**MM-40**

**GENERAL INSTRUCTIONS:**

1. All questions are compulsory.
2. Read each question carefully.

**NAME:** \_\_\_\_\_

**ROLL NO:** \_\_\_\_\_

**Section (A) [Comprehension]**

**Q1 Read the passage and answer the questions given below. (1x5=5)**

Rahul and his dad went fishing on a sunny day. They sat by the river and cast their lines. Rahul caught a big fish and felt proud. His dad smiled and hugged him. They took a photo to remember their special fishing trip.

a) Who went fishing together?

\_\_\_\_\_

b) Where did they go fishing?

\_\_\_\_\_

c) Write the homophone of THEIR?

\_\_\_\_\_

d) How did Rahul feel after catching fish?

\_\_\_\_\_

e) What did they do to remember their trip?

\_\_\_\_\_

**Section – B ( Reader )**

**Q2.) Answer the following questions.**

**(2x4=8)**

a) Why did Lightning the Ram burn things?

---

---

---

b) Why did Smita feel hurt?

---

---

---

c) Why was Smita cross and with whom?

---

---

---

d) Do you think it is better for Lightning the Ram to live in the sky?

---

---

---

**Q3.) Fill in the blanks with the words given the box.**

**(0.5x4=2)**

a) Lightning was sent to the \_\_\_\_\_ by others.

b) The people complained the king \_\_\_\_\_ times.

c) Smita's directions were \_\_\_\_\_.

d) Smita had a \_\_\_\_\_ in one hand.

**Q4) Write the meaning of the following words.\_**

**(1x4=4)**

a) Crossly \_\_\_\_\_

b) Ordered \_\_\_\_\_

c) Fierce \_\_\_\_\_

d) Flashes \_\_\_\_\_

**Section-C ( Grammar )**

**Q5) Undeline the adverbs.**

**(0.5x8=4)**

a) He writes beautifully.

b) I can run fastly.

c) The children played carefully.

d) The girl dances gracefully.

e) The sun shines brightly.

f) My mother can cook fastly.

g) The lion roars loudly.

h) I have done my work properly.

**Q6) Fill in the blanks with correct preposition.**

**(0.5x8=4)**

a) The pen is \_\_\_\_\_ the bench. **(in / under)**

**b)** The tree is \_\_\_\_\_ two houses. **(on/ between)**

- c) She stood \_\_\_\_\_ a mirror. (**under/ in front of**)
- d) My house is \_\_\_\_\_ the market. (**near/ in**)
- e) The dog is sitting \_\_\_\_\_ the armchair. (**between/ on**)
- f) I always sit \_\_\_\_\_ that girl. (**over/ behind**)
- g) We are waiting \_\_\_\_\_ the bus stop. (**at/ behind**)
- h) The bird is \_\_\_\_\_ the tree. (**at/on**)

**Q7) Join the two sentences using conjunctions given in the bracket. (1x4=4)**

- a) She has fever. She has cold. (**and**)

---

- b) Do you want to go to the market? Do you want to go to movie? (**or**)

---

- c) The giraffe is tall. The monkey is short. (**but**)

---

- d) I can dance. I can sing. (**and**)

---

**Q8) Write the Homophones for the following words. (1x4=4)**

- a) Hole- \_\_\_\_\_

- b) Made- \_\_\_\_\_

- c) Weak- \_\_\_\_\_

- d) Hare- \_\_\_\_\_

**Q10) Write five lines on My Favourite Season. (5)**

---

---

---

---

---

---

---

---

---

सेंट पी बी एन पब्लिक स्कूल

SAMPLE PAPER

इकाई परीक्षा IV

कक्षा दूसरी

विषय : हिंदी

समय 2 घंटे

अंक 40

NAME: \_\_\_\_\_ ROLL NO \_\_\_\_\_

सामान्य निर्देश :

- 1 सभी प्रश्नों के उत्तर देना अनिवार्य है।
- 2 लेख और वर्तनी का ध्यान रखें।
- 3 प्रश्नों को ध्यान से पढ़कर उत्तर दीजिए।

भाग - क

साहित्य

प्रश्न 1. निम्नलिखित गद्यांश को पढ़कर प्रश्नों के सही विकल्प चुनकर उत्तर दीजिए।

(1x5=5)

एक बार एक छोटी-सी तितली बाग में इधर-उधर फूलों पर मँडरा रही थी। तितली के पंख बहुत कोमल और रंग-बिरंगे थे। उसके छह पैर थे। तितली फूलों का रस पी रही थी। वह हम बच्चों को बहुत अच्छी लगी। सचमुच तितली बाग की रानी कहलाती है।

(i) तितली किस पर मँडरा रही थी ?

(क) फूलों पर

(ख) नदी पर

(ग) मिठाई पर

(ii) तितली के पंख कैसे थे ?

(क) गंदे

(ख) रंग - बिरंगे

(ग) सफ़ेद

(iii) तितली के कितने पैर होते हैं ?

(क) चार

(ख) छह

(ग) दो

(iv) तितली किसे बहुत अच्छी लगी ?

(क) फूलों को

(ख) बच्चों को

(ग) किसी को नहीं

(v) बाग की रानी कौन कहलाती है ?

(क) तितली

(ख) फूल

(ग) मधुमक्खी

**प्रश्न 2. सही वाक्यों पर सही (✓) तथा गलत वाक्य पर गलत (x) का निशान लगाइए ।**

**(0.5x4=2)**

(i) प्रह्लाद हिरण्यकश्यप का बेटा था । ( )

(ii) सोनू सो गया । ( )

(iii) सलोनी दीदी किसी अस्पताल में काम करती थी । ( )

(iv) सोनू की मम्मी ने उसे बाज़ार भेजा । ( )

**प्रश्न 3. रिक्त स्थान भरिए ।**

**(0.5x5=2.5)**

(i) \_\_\_\_\_ बिना पढ़े ही पंडित का मान दिलाती है।

(ii) \_\_\_\_\_ जलकर राख हो गई ।

(iii) बच्चों की \_\_\_\_\_ की छुट्टियाँ हो गई थीं ।

(iv) माँ सोनू के लिए गर्म \_\_\_\_\_ ले आई ।

(v) टोपी वाले नेता का कद \_\_\_\_\_ माना जाता है।

**प्रश्न 4. निम्नलिखित शब्दों के अर्थ लिखिए ।**

**(0.5x5=2.5)**

(i) आनंद - \_\_\_\_\_

(ii) किशोर - \_\_\_\_\_

(iii) बीड़ा उठाना - \_\_\_\_\_

(iv) लुक-छिपकर - \_\_\_\_\_

(v) जीवन-मूल्य - \_\_\_\_\_

प्रश्न 5. निम्नलिखित प्रश्नों के उत्तर एक वाक्य में लिखिए ।

(0.5×4=2)

(i) बच्चों को बोर होते देख दीदी ने उनसे कौन-सा प्रश्न पूछा ?

---

(ii) गंजे लोगों के लिए टोपी का क्या महत्व है ?

---

(iii) माँ ने सोनू को क्या याद दिलाया ?

---

(iv) लोमड़ी कुँ में कैसे पहुँची ?

---

प्रश्न 6. निम्नलिखित प्रश्नों के उत्तर लिखिए ।

(2 x 3 = 6)

(i) दूध से क्या – क्या चीजें बनाई जाती हैं ?

---

---

---

---

(ii) घरों की टंकियों से पानी बहना बंद क्यों हो गया ?

---

---

---



(iii) हम पानी को कैसे बचा सकते हैं ?

---

---

---

भाग - ख  
व्याकरण

प्रश्न 1. समान अर्थ वाले एक - एक शब्द लिखिए :

(1×4=4)

- i) चाँद - \_\_\_\_\_
- ii) राजा - \_\_\_\_\_
- iii) बादल - \_\_\_\_\_
- iv) पेड़ - \_\_\_\_\_

प्रश्न 2. साल के बारह महीनों के नाम लिखिए :

(0.5×12=6)

- |            |             |
|------------|-------------|
| i) _____   | ii) _____   |
| iii) _____ | iv) _____   |
| v) _____   | vi) _____   |
| vii) _____ | viii) _____ |
| ix) _____  | x) _____    |
| xi) _____  | xii) _____  |

**(1x5=5)**

- (1x5=5)**

**ST. PBN PUBLIC SCHOOL, GURUGRAM**

**UNIT TEST – IV  
CLASS – II  
MATHEMATICS  
SAMPLE PAPER**

**TIME: 2 Hours**

**MM-50**

**GENERAL INSTRUCTIONS:**

3. All questions are compulsory.
4. Read each question carefully.

**NAME:** \_\_\_\_\_

**ROLL NO:** \_\_\_\_\_

**1. Tick the correct answer.**

**(1x10=10)**

(i) ₹1 = \_\_\_\_\_ paise.

(a) 100

(b) 100

(ii) The symbol for Indian rupee is \_\_\_\_\_.

(a) \$

(b) ₹

(iii) ₹55 = ₹20 + ₹ \_\_\_\_\_.

(a) 35

(b) 25

(iv) The day before today is \_\_\_\_\_.

(a) Tomorrow

(b) Yesterday

(v) I have dinner at 8 \_\_\_\_\_.

(a) a.m.

(b) p.m.

(vi) The month after March \_\_\_\_\_.

(a) April

(b) February

(vii) 5,10,15,20,25\_\_\_\_\_.

(a)30

(b) 35

(viii) 01,012,0123,\_\_\_\_\_.

(a)012345

(b) 01234

(ix) AB,AAB,AAAB,\_\_\_\_\_.

(a)AAAAB

(b) AAAAAB

(x) 1A,2B,\_\_\_\_\_,4D.

(a) 3E

(b) 3C

2. Solve the following as instructed.

(2x8=16)

(i) Solve the following.

(a) ₹                  p

826                  36

+ 21                  27

\_\_\_\_\_

(b) ₹                  p

198                  63

- 115                  26

\_\_\_\_\_

(ii) Write in figures:

(a) Thirty two rupees. \_\_\_\_\_

(b) One hundred sixty three rupees. \_\_\_\_\_

(iii) Write in words:

(a) ₹500= \_\_\_\_\_.


(b) ₹382= \_\_\_\_\_.

(iv) Draw the hands of the clock to show the given time.

3:00



(v) Use the clock to fill in the blanks.



(a) The time is \_\_\_\_\_.

(b) After 30 minutes the time will be \_\_\_\_\_.

(vi) Complete the pattern:

(a) AB1, AC1, AD1, \_\_\_\_\_, \_\_\_\_\_.

(b) 6, 12, 18, \_\_\_\_\_, \_\_\_\_\_

(vii) Complete the pattern:

(a) PQ10, RS20, \_\_\_\_\_, \_\_\_\_\_

(b) ABC, BCD, CDE, \_\_\_\_\_, \_\_\_\_\_.

(viii) What time is it? Use a.m. or p.m.

(a) 7 o'clock in the morning \_\_\_\_\_.

(b) Half past 6 in the evening \_\_\_\_\_.

3. State True or False.

(1x4=4)

(i) 1 hour = 60 minutes.

\_\_\_\_\_

(ii) Quarter hour = 15 minutes.

\_\_\_\_\_

(iii) ₹20+₹16= ₹46

\_\_\_\_\_

(iv) Quarter past 2 mean 2:45

\_\_\_\_\_

4. Word problems.

(2x3=6)

(i) Radha bought 3 pencils, 3 erasers and 2 chocolates .Find the total amount spent by her.

3 Pencils	₹15
3 Erasers	₹15
2 Chocolates	₹40
Total	₹_____

(ii) Yesterday Jamie started playing football at 8:00 p.m. He played for 1 hour. At what time did he finish?

5. Dodging of tables.

(1x5=5)

(i)  $6 \times 8 =$ \_\_\_\_\_.

(ii)  $9 \times 7 =$ \_\_\_\_\_.

(iii)  $7 \times 4 =$ \_\_\_\_\_.

(iv)  $3 \times 8 =$ \_\_\_\_\_.

(v)  $5 \times 5 =$ \_\_\_\_\_.

6. Fill in the blanks.

(1x5=5)

(i) The day after today is \_\_\_\_\_.

(ii) First day of the week is \_\_\_\_\_.

(iii) 8,16,24,\_\_\_\_\_,\_\_\_\_\_.

(iv) \_\_\_\_\_ 5 rupee notes make ₹50.

(v) ₹140 = ₹100 + ₹20 + ₹\_\_\_\_\_.

#### Q7. Case Study :

Captain is having a yard sale of some of his toys. A soft toy cat ₹ 30 Rs, basketball ₹ for 50 Rs, a toy car for 40Rs and a teddy ₹ for 50 Rs.

1.Which toy is the cheapest?

2.Which toy is most expensive?

3.How much does the toy cat and a basketball cost?

4.What is the difference in the cost of a teddy and a toy cat?

**St. PBN PUBLIC SCHOOL, GURUGRAM**  
**UNIT TEST-IV**  
**Class -II**  
**EVS**  
**Sample paper**

**MM-40**

**Time: 2 hours**

**Q1- Fills in the blanks :-**

**(1X5=5)**

- i) We cannot drink ocean or sea water because it is\_\_\_\_\_.
- ii) Moving air is called \_\_\_\_\_.
- iii) A \_\_\_\_\_ is one of the oldest means of communication.
- iv) Flat and high lands on earth are called\_\_\_\_\_.
- v) The \_\_\_\_\_ collects letters from the post office.

**Q2. Tick the correct option :-**

**(1X10=10)**

1- The camel is known as \_\_\_\_\_.

- a) Ship of the desert (    )
- b) Bullock cart (    )
- c) Water bodies (    )
- d) Landforms (    )

2- The earth is made up of\_\_\_\_\_.

- a) Soil (    )
- b) Water (    )
- c) Land, air and water (    )
- d) Blue planet (    )

3-\_\_\_\_\_ are higher than hills.

- a) Snow (    )
- b) Mountains (    )
- c) Animals (    )
- d) Flatlands (    )

4-\_\_\_\_\_ has flowing water body.

- a) River (    )
- b) Ponds (    )
- c) Lakes (    )



d) Well ( )

5- The low land between two hills is called\_\_\_\_\_.

a) Mountains ( )

b) Rainfall ( )

c) Valley ( )

d) Ponds ( )

6- When did the first train start in India?

a) 16 April 1853 ( )

b) 20 April 1853 ( )

c) 30 September 2000 ( )

d) 25 November 1947 ( )

7- One common thing in all the vehicles?

a) Colour ( )

b) Wheels ( )

c) Machine ( )

d) Engine ( )

8- \_\_\_\_\_is the means of air transport.

a) Helicopter ( )

b) Boat ( )

c) Bullock cart ( )

d) Car ( )

9- Vehicles get energy from\_\_\_\_\_.

a) Energy drink ( )

b) Fuel ( )

c) Food ( )

d) Water ( )

10- We celebrate the earth day on \_\_\_\_\_.

a) 22 April ( )

b) 22 June ( )

c) 25 May ( )

d) 10 October ( )

**Q3- Write 'YES' or 'NO' :-**

**(1X5=5)**

- a) Early man tamed animals to carry their goods\_\_\_\_\_.
- b) Ships can move in river\_\_\_\_\_.
- c) Email is a means of communication\_\_\_\_\_.
- d) Helicopter can travel to places where it is difficult to reach by\_\_\_\_\_
- e) Ships and boats are means of water transport\_\_\_\_\_

**Q4- Answer the following questions :-**

**(2X5=10)**

**1- What is cruise?**

Ans

---

---

**2- Which planet is known as 'blue planet'?**

Ans

---

---

**3- Name some vehicles pulled by animals?**

Ans -

---

---

**4- What is means of communication?**

Ans -

---

---

**5- What is air?**

Ans -

---

---

**Q5- Name the following :-**

**(1X5=5)**

- i. Name of the fastest train in India\_\_\_\_\_
- ii. Air that moves very strongly is called\_\_\_\_\_
- iii. The earth is surrounded by a thick layer of\_\_\_\_\_
- iv. A means of transport that runs on tracks\_\_\_\_\_ .
- v. A means of air transport that can travel to high mountains\_\_\_\_\_.

**Q6. Case based questions :-**

**(1X5=5)**

The earth is made up of land, water and air. The blue part is water and green part is land.

- I. Flatlands are also known as\_\_\_\_\_
  - a) Plains
  - b) Breeze
  
- II. Oceans and seas are \_\_\_\_\_ water bodies.
  - a) Small
  - b) Large
  
- III. Rainfall is another source of \_\_\_\_\_ water.
  - a) Polluted
  - b) Fresh
  
- IV. We need \_\_\_\_\_to breathe.
  - a) Air
  - b) Sandwich
  
- V) Plants and animals also need\_\_\_\_\_.
  - a) oxygen
  - b) Bus



**ST. PBN PUBLIC SCHOOL**  
**UNIT TEST - IV**  
**CLASS-II**  
**COMPUTER**  
**SAMPLE PAPER**

**Time: 1Hour**

**MM: 20**

**General Instructions:**

1. All questions are compulsory.
2. Read each question carefully.

**NAME:** \_\_\_\_\_ **ROLL NO:** \_\_\_\_\_

**A. Tick the Correct Answer. (0.5x5=2.5)**

1. To make drawing \_\_\_\_\_program is used.  
a. Paint                                      b. Notepad                                      c. All Programs
2. The save option is present in the \_\_\_\_\_ button.  
a. Image                                      b. Space                                      c. Paint
3. We can select the open option by clicking on the \_\_\_\_\_ button.  
a. Paint                                      b. File                                      c. Home
4. Which tool is used to erase any part of drawing?  
a. Save                                      b. Open tool                                      c. Eraser tool
5. Which device is used to make drawing?  
a. Mouse                                      b. Keybord                                      c. Pen drive

**B. Fill in the blanks. (0.5x5=2.5)**

**(Up and down, drawing canvas, brush, Magic tool, open tool )**

1. The \_\_\_\_\_ tool contains the Airbrush option.
2. The \_\_\_\_\_ opens saved drawing.

3. The \_\_\_\_\_ tool is used to add magic effects.
4. The selector contains two buttons on it. \_\_\_\_\_.
5. The picture will appear on the \_\_\_\_\_.

**C. Tick True (T) or False (F).**

(0.5x10=5)

1. Tux paint is a paint program designed for students.
  - a. True
  - b. False
2. The save tool from the toolbar is used to close the drawing.
  - a. True
  - b. False
3. The pointer shape changes to Paint brush.
  - a. True
  - b. False
4. The polygon tool works like the Line tool.
  - a. True
  - b. False
5. The quit tool is used to colour any drawing.
  - a. True
  - b. False
6. All the tools have similar functions in Tux paint.
  - a. True
  - b. False
7. The Office button in Paint contains the shapes options.
  - a. True
  - b. False
8. We can Select the Polygon tool from the colours group.
  - a. True
  - b. False
10. We can use notepad program to make drawing.
  - a. True
  - b. False

**D. Answer in one word or one sentence.**

**(1x6=6)**

1. From which group can we draw a rectangle?

2. Which tool is used to draw lines in paint?

---

3. Which tool is used to create a spray effect in a picture?

---

4. Which tool in Tux Paint is like the Brush tool of MS Paint?

---

5. Name the tool that is used to close the tux paint program.

---

6. Which button is used to start a new Drawing?

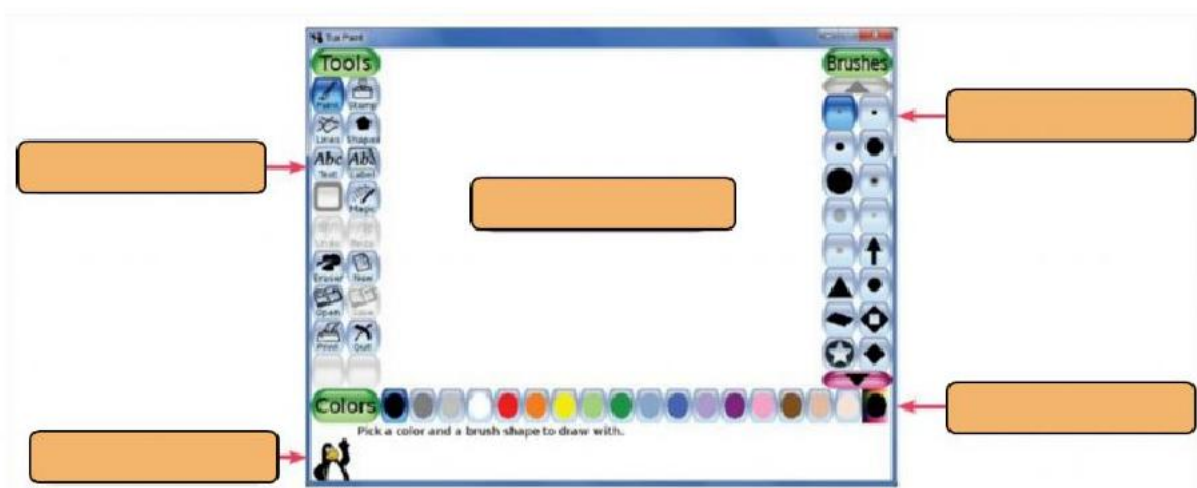
---

### E. Case based questions-

1. Label the different parts of the Tux Paint window.

(0.5x5=2.5)

(Help area, Selector, Toolbar, Colour box, Drawing Canvas)




2. Match the followings-

(0.5x3=1.5)



Air brush tool



Polygon tool



Fill with colour